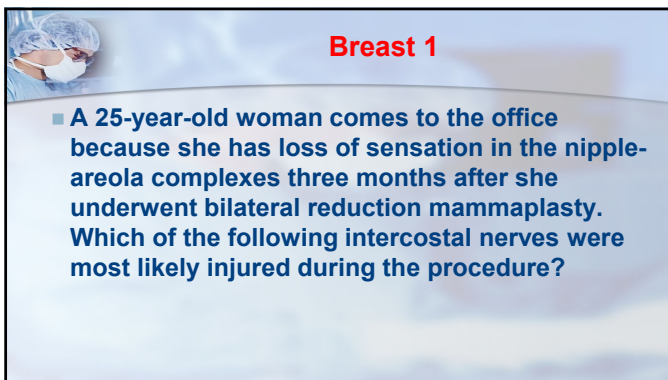
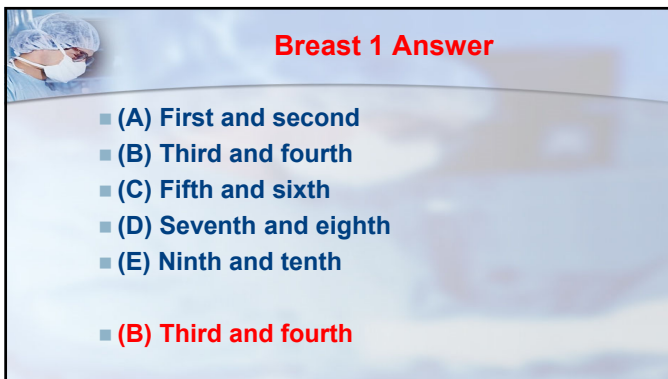



1



2




3



Breast 2

■ A 38-year-old woman has severe congestion and edema of the left nipple-areola complex four hours after undergoing bilateral reduction mammoplasty. Examination shows rapid capillary refill. Which of the following surgical interventions is the most appropriate initial management?

4




Breast 2 Answer

(A) Debridement and healing by second intention
 (B) Release of the suture line and exploration of the pedicle
 (C) Convert nipple-areola complex to a free composite graft
 (D) Central wedge resection under the nipple-areola complex
 (E) Removal of additional tissue from the breast

(B) Release of the suture line and exploration of the pedicle

5



Breast 3

■ A 20-year-old woman who comes to the office for consultation regarding reduction mammoplasty inquires about ability to breast-feed after surgery. The most appropriate response to this patient is that breast-feeding is possible after each of the following techniques EXCEPT


6



(A) Free Nipple Graft
(B) Inferior Pedicle
(C) Liposuction
(D) Mckissock Bipedicle
(E) Vertical Reduction

(A) Free Nipple Graft


7



Abdominoplasty 1

- Following abdominoplasty, skin necrosis is most likely to occur at which of the following sites?
 - (A) Epigastrium
 - (B) Flanks
 - (C) Periumbilical region
 - (D) Suprapubic region
 - (E) Umbilicus
- **(D) Suprapubic region**


8



Abdominoplasty 2

- A 36-year-old woman has numbness of the anterolateral right thigh one month after undergoing abdominoplasty. The most likely cause is injury to which of the following nerves?
 - (A) Genitofemoral
 - (B) Lateral cutaneous
 - (C) Iliohypogastric
 - (D) Ilioinguinal
 - (E) Obturator
- **(B) Lateral cutaneous**

9



Abdominoplasty 3

- A 35-year-old woman who weighs 80 kg (176 lb) is undergoing large volume suction lipectomy with expected removal of 5 L of aspirate. In this patient, the total dose of lidocaine should NOT exceed how many milligrams?
- (A) 300
- (B) 400
- (C) 1600
- (D) 2800
- (E) 4400
